

Chemistry 1210 Exam 3- Jordan. Fall 1999. Form A

Name _____

ID Key

By submitting this exam, I certify that I have neither given nor received unauthorized aid.

You must show all work for credit

Useful information: $\Delta G = \Delta H - T\Delta S$, $C = q/\Delta T$, $\Delta H = \Delta E + P\Delta V$, $\Delta E = q + w = q - P\Delta V$, $w = -P\Delta V$, $1\text{L}\cdot\text{atm} = 101\text{J}$, $PV = nRT$, $R = 0.0821\text{ (Latm)/(molK)} = 8.314\text{ J/(molK)}$, $J = \text{kgm}^2/\text{s}^2$, $\text{Rate}_1/\text{Rate}_2 = (\text{MW}_2/\text{MW}_1)^{1/2}$, $u^2 = (3RT)/\text{MW}$

(1) The heat capacity of Al is $0.902\text{ J/(g}\cdot\text{C)}$, how much energy does it take to heat a 1.20 kg aluminum frying pan from 20.0 C to 150 C ? $\Delta T = 150.0 - 20.0 = 130\text{ C}$ $1.20\text{ kg} = 1.20 \times 10^3\text{ g}$

(+4)

$$\frac{0.902\text{ J}}{\text{g}\cdot\text{C}} \times 130\text{ C} \times 1.20 \times 10^3\text{ g} = \boxed{1.41 \times 10^5\text{ J}}$$

(2) Define the following in terms of ΔH and also without using ΔH .

(+2) (a) exothermic $\Delta H < 0$, heat leaves the system

(+2) (b) endothermic $\Delta H > 0$ heat enters the system

(3) In the reaction below, the change in volume of the reaction of 2 moles of H_2 with 1 mole of O_2 is -67.2 L .

(a) If the atmospheric pressure is 1.00 atm , how much PV work is done (in J, the sign counts).

$$2\text{H}_{2(g)} + \text{O}_{2(g)} \rightarrow 2\text{H}_2\text{O}_{(l)} \quad \Delta H = -571.6\text{ kJ}$$

$$\Delta V = -67.2\text{ L} \quad P = 1.00\text{ atm} \quad P\Delta V = (-67.2\text{ L})(1.00\text{ atm}) = -67.2\text{ L}\cdot\text{atm}$$

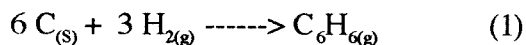
$$W = -P\Delta V = 67.2\text{ L}\cdot\text{atm}$$

$$67.2\text{ L}\cdot\text{atm} \times \frac{101\text{ J}}{\text{L}\cdot\text{atm}} = \boxed{6.79 \times 10^3\text{ J}} = 6.79\text{ kJ}$$

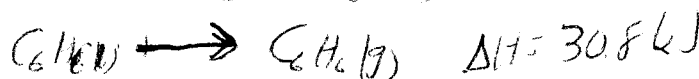
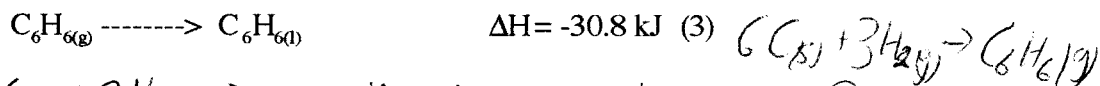
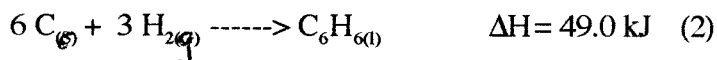
(b) What is ΔE for the reaction above?

$$\Delta H = \Delta E + P\Delta V \quad -571.6\text{ kJ} = \Delta E - 6.79\text{ kJ} \quad \Delta E = -564.8\text{ kJ}$$


(4) Use Hesse's Law and the following equations to find ΔH for the formation of $C_6H_{6(g)}$ (equation 1)



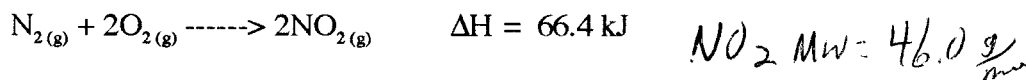
Use the following equations



$$6 C_{(s)} + 3 H_{2(g)} \rightarrow C_6H_{6(g)} \quad \Delta H = 79.8 \text{ kJ}$$



(5) Given the following reaction (equation 1), (a) is heat given off or absorbed when 10.2 g of NO_2 is formed and (b) How much energy is given off or absorbed?




(a) absorbs heat

$$10.2 \text{ g} \div 46.0 \frac{g}{mole} = 0.222 \text{ mole}$$

$$(b) \Delta H = \frac{66.4 \text{ kJ}}{2 \text{ mole } NO_2} = \frac{33.2 \text{ kJ}}{1 \text{ mole } NO_2}$$

$$\frac{33.2 \text{ kJ}}{\text{mole}} \times 0.222 \text{ mole} = 7.36 \text{ kJ}$$

(6) What is the heat of combustion for acetic acid (CH_3COOH)? The heat of formation for acetic acid is -484.5 kJ .

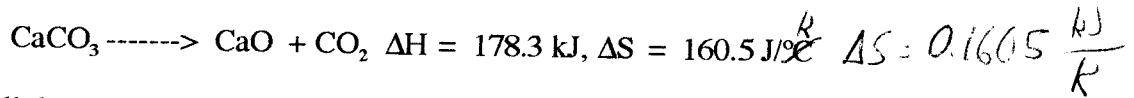


$$\Delta H = (2 \Delta H_{f, CO_2} + 2 \Delta H_{f, H_2O}) - (\Delta H_{f, CH_3COOH} + 0) =$$

$$\Delta H = -784.5 \text{ kJ}$$

$$[2(-393.5 \text{ kJ}) + 2(-241 \text{ kJ})] - (-484.5 \text{ kJ})$$

(7) Given the reaction and the information below, answer the following questions



(a) Will the reaction be spontaneous at 400 K? Why?

$$\Delta G = \Delta H - T\Delta S = 178.3 \text{ kJ} - (400 \text{ K}) \left(0.1605 \frac{\text{kJ}}{\text{K}} \right)$$

$$\Delta G = 114.1 \text{ kJ}$$

no, it will not be spontaneous

(b) Above what temperature will this reaction be spontaneous (and why)?

$\Delta G = 0$ for equilibrium

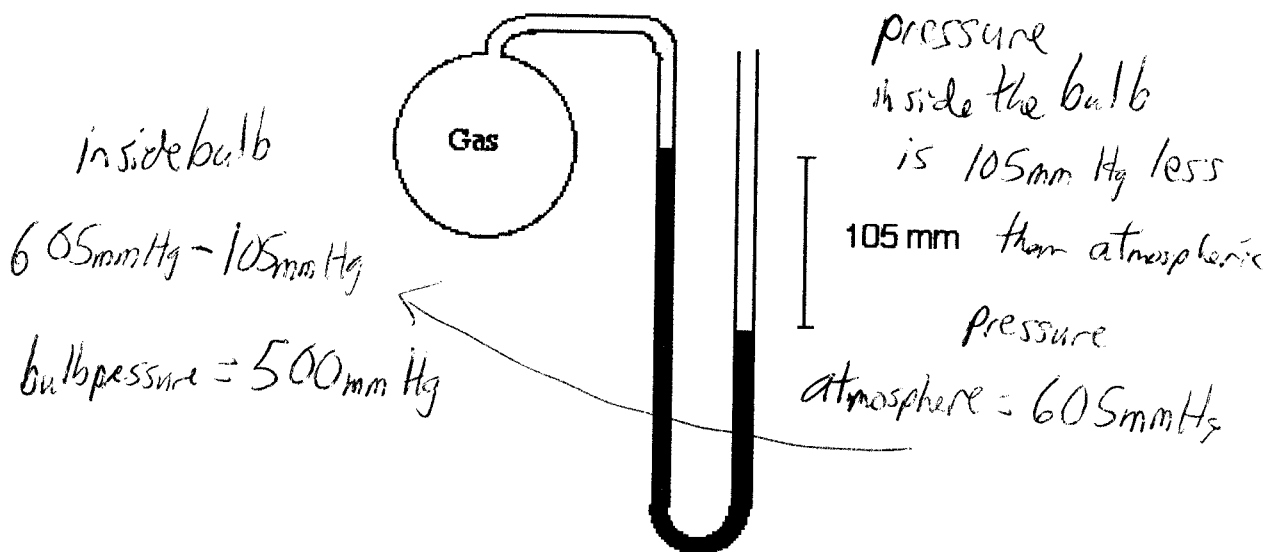
$$0 = \Delta H - T\Delta S = 178.3 \text{ kJ} - T \left(0.1605 \frac{\text{kJ}}{\text{K}} \right)$$

$$178.3 \text{ kJ} = T \left(0.1605 \frac{\text{kJ}}{\text{K}} \right)$$

$$1.11 \times 10^3 \text{ K} = T$$

above $1.11 \times 10^3 \text{ K}$
it will be spontaneous

(8) Given the mercury manometer shown below, if the atmospheric pressure is 605 mm of Hg, what is the pressure inside the bulb?



Assume 1.00L of gas $PV=nRT$ $MW_{AsH_3} = 77.95 \frac{g}{mol}$
 $25^\circ C = 298K$

$$(1.00 \text{ atm})(1.00L) = n(0.0821 \frac{L \cdot \text{atm}}{\text{mol} \cdot K})(298K)$$

$$4.09 \times 10^{-2} \text{ moles} = n \text{ in } 1.00L$$

$$4.09 \times 10^{-2} \text{ moles} \times \frac{77.95g}{\text{mole}} = 3.19g$$

$$\frac{3.19g}{1.00L} = \boxed{3.19 \frac{g}{L}}$$

9) State 4 points of the Kinetic-Molecular Theory of Gases.

- (1) A gas consists of tiny particles (atoms or molecules)
- (2) The volume of the gas particles is negligible + each
- (3) Attractive and repulsive forces between particles (1) 4
are negligible
- (4) Collisions of gas particles are perfectly elastic
- (5) Temperature (K) is a measure (is proportional to) the average kinetic energy of the gas particles.

10) decrease
 If you have Ar at 1.70 atm of pressure in a 2.00 L container at 273 K, what will the pressure be if you ~~increase~~ the temperature to 268 K?
initial $PV=nRT$ final

$$(1.70 \text{ atm})(2.00L) = n(0.0821 \frac{L \cdot \text{atm}}{\text{mol} \cdot K})(273K)$$

$$0.152 \text{ moles} = n$$

$$P(2.00L) = 0.152 \text{ moles} (0.0821 \frac{L \cdot \text{atm}}{\text{mol} \cdot K}) 268K$$

$$\boxed{P = 1.67 \text{ atm}}$$

11) What is the density of AsH_3 at $25^\circ C$ and 1.00 atm pressure?

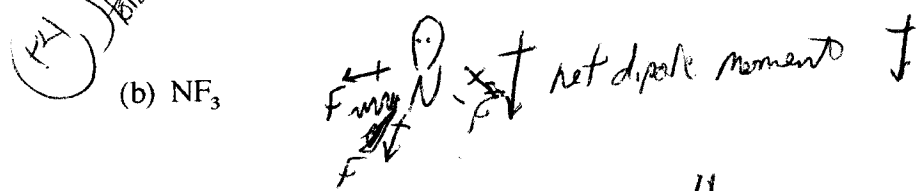
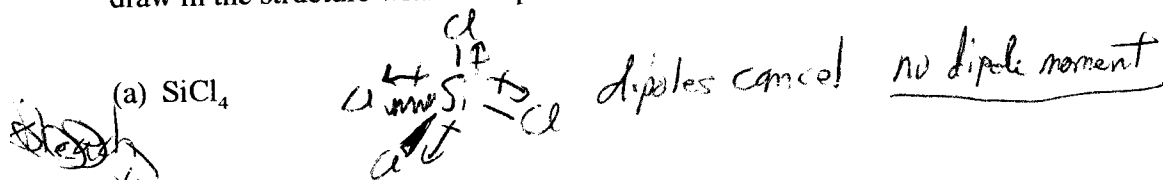
AsH_3 $MW = 77.95 \frac{g}{mol}$
 $PV=nRT$ Assume 1.00L $25^\circ C = 298K$ $n = 4.09 \times 10^{-2} \text{ moles } AsH_3$
 $(1.00 \text{ atm})(1.00L) = n(0.0821 \frac{L \cdot \text{atm}}{\text{mol} \cdot K})(298K)$ $4.09 \times 10^{-2} \text{ moles} \times 77.95 \frac{g}{\text{mole}} = 3.19g$
 $\frac{3.19g}{1.00L} = \boxed{3.19 \frac{g}{L}}$

✓ (12) How much faster would you expect He to effuse through a porous media than SiCl₄?

$$\frac{Rate_1}{Rate_2} = \frac{\sqrt{MW_2}}{\sqrt{MW_1}}$$
 He MW = 4.00 g/mole
 SiCl₄ MW = 169.9 g/mole

$$\frac{Rate_{He}}{Rate_{SiCl_4}} = \frac{\sqrt{MW_{SiCl_4}}}{\sqrt{MW_{He}}} = \frac{\sqrt{169.9 \frac{g}{mole}}}{\sqrt{4.00 \frac{g}{mole}}} = 6.52 \times \text{faster}$$

✓ (13) Specify if each of the following molecules has a permanent dipole moment. If they do, draw in the structure with the dipole moment specified



✓ (14) Specify the type of intermolecular forces that will be important for the following compounds in the liquid or solid state.

x/each (a) CH₃OH dispersion forces, ~~also~~ hydrogen bonding

(b) N₂ dispersion forces

(c) CH₂Cl₂ dispersion forces, dipole-dipole forces

(d) CH₄

dispersion forces

(15) Which process will have a larger ΔH , melting or boiling? Why? What will the sign of ΔH be? (and why)

boiling Only a small # of bonds or interatomic or intermolecular forces need to be broken to melt a solid. To boil a liquid, you must break all the remaining interatomic or intermolecular forces. So ΔH will be positive. Energy needed to break those attractive forces.

✓
(P1)
Extra Credit: What is the average velocity of a He atom at 400 K?

$$u^2 = \frac{3RT}{M_w} \quad T = 400\text{K} \quad M_w = 4.00 \frac{\text{g}}{\text{mol}}$$

$$u^2 = \frac{3(8.314 \frac{\text{J}}{\text{mol K}})(400\text{K})}{4.00 \frac{\text{g}}{\text{mol}}}$$

$$u^2 = \frac{3(8.314 \frac{\text{kg m}^2}{\text{s}^2 \text{mol K}})(400\text{K})}{0.00400 \frac{\text{kg}}{\text{mol}}}$$

Note: The extra credit problem was changed just prior to the exam. Look up Dalton's Law of Partial Pressure

$$u^2 = 2.494 \times 10^6 \frac{\text{m}^2}{\text{s}^2}$$

$$u = 1.58 \times 10^3 \frac{\text{m}}{\text{s}}$$